



Name \_\_\_\_\_

### Telling Time Worksheet

# Draw Hands on the Clock

Look at each of the times below and draw the hour and minute hands on the clocks to show the correct time.



6:30




11:30



8:00




5:30




10:30



12:30



3:30



7:00



9:00