



Name _____


Telling Time Worksheet

Draw Hands on the Clock


Look at each of the times below and draw the hour and minute hands on the clocks to show the correct time.



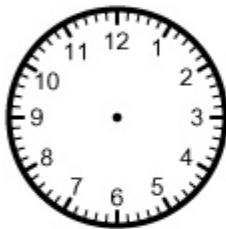
7:15



8:06



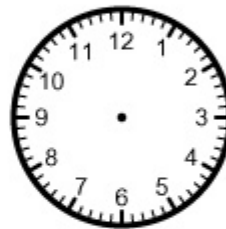
4:41




6:42




3:52



1:25



10:48



5:23



9:14