



Name \_\_\_\_\_

### Telling Time Worksheet

# Draw Hands on the Clock

Look at each of the times below and draw the hour and minute hands on the clocks to show the correct time.



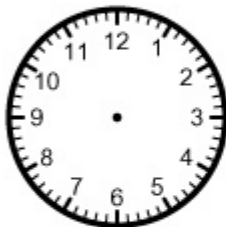
2:18



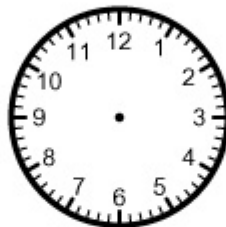
10:30



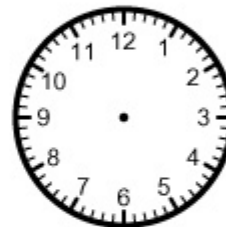
6:24



7:27




12:38



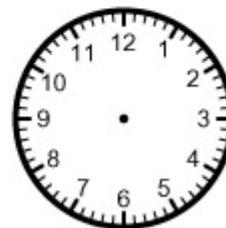
5:46



4:17



11:16



9:19